

Additional Practice

Use the figure to find each of the following measurements. A is the center of the circle.

1. $m\widehat{CE}$

2. $m\angle DAF$

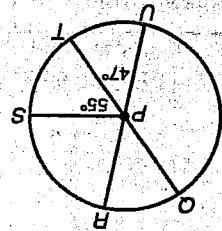
3. $m\widehat{EF}$

4. $m\widehat{BD}$

5. $m\angle BAD$

6. $m\widehat{EFD}$

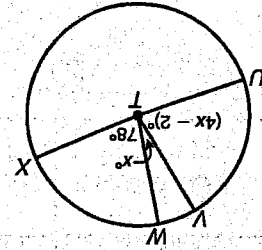
Find each measure.



7.

$m\widehat{QS}$

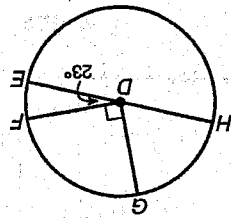
$m\widehat{RQT}$



9.

Find $m\angle UTW$.

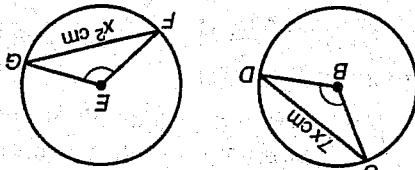
8.



$m\widehat{HG}$

$m\widehat{FEH}$

10.



$\odot L \cong \odot E$, and $\angle CBD \cong \angle FEG$.

Find \widehat{FG} .

